

General Certificate of Education  
June 2006  
Advanced Level Examination



**MATHEMATICS**  
**Unit Mechanics 3**

**MM03**

Wednesday 21 June 2006 1.30 pm to 3.00 pm

**For this paper you must have:**

- an 8-page answer book
- the **blue** AQA booklet of formulae and statistical tables

You may use a graphics calculator.

Time allowed: 1 hour 30 minutes

**Instructions**

- Use blue or black ink or ball-point pen. Pencil should only be used for drawing.
- Write the information required on the front of your answer book. The *Examining Body* for this paper is AQA. The *Paper Reference* is MM03.
- Answer **all** questions.
- Show all necessary working; otherwise marks for method may be lost.
- The **final** answer to questions requiring the use of calculators should be given to three significant figures, unless stated otherwise.
- Take  $g = 9.8 \text{ m s}^{-2}$ , unless stated otherwise.

**Information**

- The maximum mark for this paper is 75.
- The marks for questions are shown in brackets.

**Advice**

- Unless stated otherwise, you may quote formulae, without proof, from the booklet.

---

Answer **all** questions.

---

- 1 The time  $T$  taken for a simple pendulum to make a single small oscillation is thought to depend only on its length  $l$ , its mass  $m$  and the acceleration due to gravity  $g$ .

By using dimensional analysis:

- (a) show that  $T$  does **not** depend on  $m$ ; (3 marks)
- (b) express  $T$  in terms of  $l$ ,  $g$  and  $k$ , where  $k$  is a dimensionless constant. (4 marks)

- 2 Three smooth spheres  $A$ ,  $B$  and  $C$  of equal radii and masses  $m$ ,  $m$  and  $2m$  respectively lie at rest on a smooth horizontal table. The centres of the spheres lie in a straight line with  $B$  between  $A$  and  $C$ . The coefficient of restitution between any two spheres is  $e$ .

The sphere  $A$  is projected directly towards  $B$  with speed  $u$  and collides with  $B$ .

- (a) Find, in terms of  $u$  and  $e$ , the speed of  $B$  immediately after the impact between  $A$  and  $B$ . (5 marks)
- (b) The sphere  $B$  subsequently collides with  $C$ . The speed of  $C$  immediately after this collision is  $\frac{3}{8}u$ . Find the value of  $e$ . (7 marks)

- 3 A ball of mass  $0.45 \text{ kg}$  is travelling horizontally with speed  $15 \text{ m s}^{-1}$  when it strikes a fixed vertical bat directly and rebounds from it. The ball stays in contact with the bat for  $0.1$  seconds.

At time  $t$  seconds after first coming into contact with the bat, the force exerted on the ball by the bat is  $1.4 \times 10^5(t^2 - 10t^3)$  newtons, where  $0 \leq t \leq 0.1$ .

In this simple model, ignore the weight of the ball and model the ball as a particle.

- (a) Show that the magnitude of the impulse exerted by the bat on the ball is  $11.7 \text{ N s}$ , correct to three significant figures. (4 marks)
- (b) Find, to two significant figures, the speed of the ball immediately after the impact. (4 marks)
- (c) Give a reason why the speed of the ball immediately after the impact is different from the speed of the ball immediately before the impact. (1 mark)

- 4 The unit vectors  $\mathbf{i}$  and  $\mathbf{j}$  are directed due east and due north respectively.

Two cyclists, Aazar and Ben, are cycling on straight horizontal roads with constant velocities of  $(6\mathbf{i} + 12\mathbf{j}) \text{ km h}^{-1}$  and  $(12\mathbf{i} - 8\mathbf{j}) \text{ km h}^{-1}$  respectively. Initially, Aazar and Ben have position vectors  $(5\mathbf{i} - \mathbf{j}) \text{ km}$  and  $(18\mathbf{i} + 5\mathbf{j}) \text{ km}$  respectively, relative to a fixed origin.

- (a) Find, as a vector in terms of  $\mathbf{i}$  and  $\mathbf{j}$ , the velocity of Ben relative to Aazar. (2 marks)
- (b) The position vector of Ben relative to Aazar at time  $t$  hours after they start is  $\mathbf{r} \text{ km}$ .

Show that

$$\mathbf{r} = (13 + 6t)\mathbf{i} + (6 - 20t)\mathbf{j} \quad (4 \text{ marks})$$

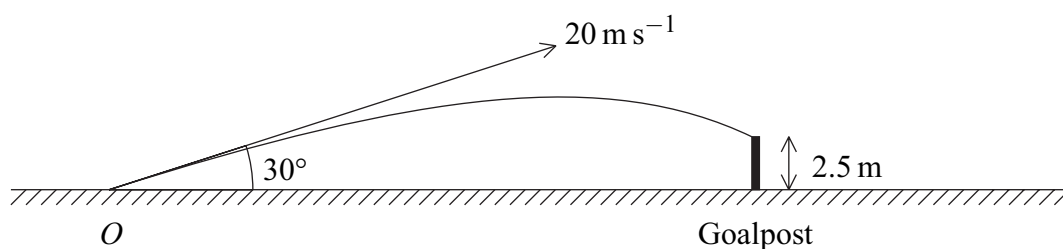
- (c) Find the value of  $t$  when Aazar and Ben are closest together. (6 marks)
- (d) Find the closest distance between Aazar and Ben. (2 marks)

- 5 A football is kicked from a point  $O$  on a horizontal football ground with a velocity of  $20 \text{ m s}^{-1}$  at an angle of elevation of  $30^\circ$ . During the motion, the horizontal and upward vertical displacements of the football from  $O$  are  $x$  metres and  $y$  metres respectively.

- (a) Show that  $x$  and  $y$  satisfy the equation

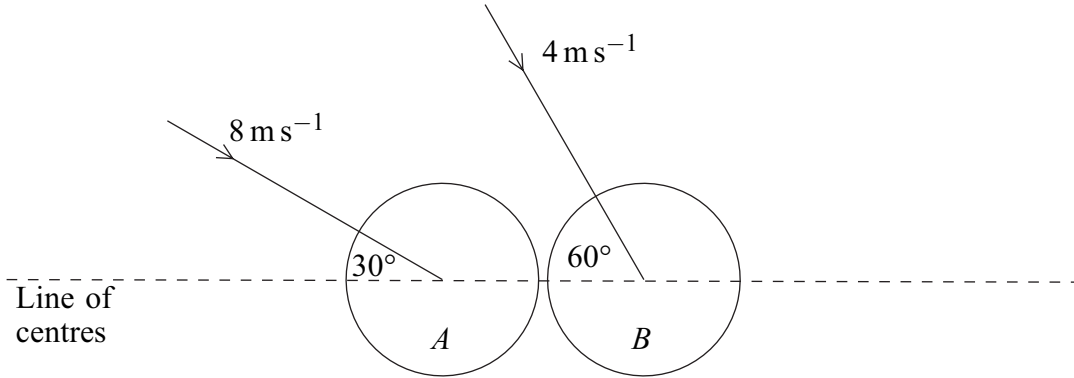
$$y = x \tan 30^\circ - \frac{gx^2}{800 \cos^2 30^\circ} \quad (6 \text{ marks})$$

- (b) On its downward flight the ball hits the horizontal crossbar of the goal at a point which is 2.5 m above the ground. Using the equation given in part (a), find the horizontal distance from  $O$  to the goal. (4 marks)



- (c) State **two** modelling assumptions that you have made. (2 marks)

- 6 Two smooth billiard balls  $A$  and  $B$ , of identical size and equal mass, move towards each other on a horizontal surface and collide. Just before the collision,  $A$  has velocity  $8 \text{ m s}^{-1}$  in a direction inclined at  $30^\circ$  to the line of centres of the balls, and  $B$  has velocity  $4 \text{ m s}^{-1}$  in a direction inclined at  $60^\circ$  to the line of centres, as shown in the diagram.

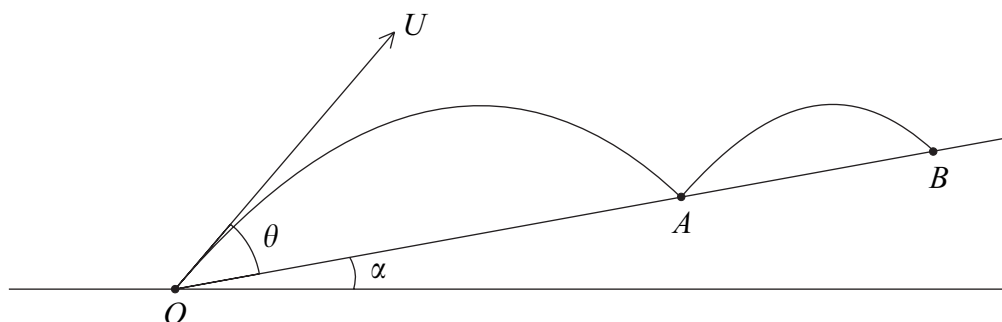


The coefficient of restitution between the balls is  $\frac{1}{2}$ .

- (a) Find the speed of  $B$  immediately after the collision. (9 marks)
- (b) Find the angle between the velocity of  $B$  and the line of centres of the balls immediately after the collision. (2 marks)

7 A projectile is fired from a point  $O$  on the slope of a hill which is inclined at an angle  $\alpha$  to the horizontal. The projectile is fired up the hill with velocity  $U$  at an angle  $\theta$  above the hill and first strikes it at a point  $A$ . The projectile is modelled as a particle and the hill is modelled as a plane with  $OA$  as a line of greatest slope.

- (a) (i) Find, in terms of  $U$ ,  $g$ ,  $\alpha$  and  $\theta$ , the time taken by the projectile to travel from  $O$  to  $A$ . (3 marks)
- (ii) Hence, or otherwise, show that the magnitude of the component of the velocity of the projectile perpendicular to the hill, when it strikes the hill at the point  $A$ , is the same as it was initially at  $O$ . (3 marks)
- (b) The projectile rebounds and strikes the hill again at a point  $B$ . The hill is smooth and the coefficient of restitution between the projectile and the hill is  $e$ .



Find the ratio of the time of flight from  $O$  to  $A$  to the time of flight from  $A$  to  $B$ . Give your answer in its simplest form. (4 marks)

**END OF QUESTIONS**

**There are no questions printed on this page**

**There are no questions printed on this page**

**There are no questions printed on this page**